

2013 SACS CLASSICAL MONUMENTS AND GEOGRAPHY TEST #16

I. Select the best answer.

1. Which of these structures allowed the development of the Forum Romanum?
 - a) Di Consentes
 - b) Cloaca Maxima
 - c) Sette Sale
 - d) Pons Fabricius
2. Which of these does not belong with the others?
 - a) Panormus
 - b) Mylae
 - c) Utica
 - d) Lilybaeum
3. Which is farthest west?
 - a) Aquitania
 - b) Galatia
 - c) Lusitania
 - d) Cyrenaica
4. Which is farthest east?
 - a) Noricum
 - b) Cilicia
 - c) Numidia
 - d) Achaea
5. Which of these is not a port city?
 - a) Rhodes
 - b) Ephesus
 - c) Emesa
 - d) Nicomedia
6. Which pair is not correct?
 - a) Eboracum/York
 - b) Lutetia/Paris
 - c) Nicomedia/Izmit
 - d) BagraDas/Bordeaux
7. Which of these is not an island?
 - a) Naxos
 - b) Baleares
 - c) Samos
 - d) Pelusium
8. Cilicia is just north of:
 - a) Sicilia
 - b) Cyprus
 - c) Thrace
 - d) Baetica
9. Which does not belong with the others:
 - a) Phrygia
 - b) Lydia
 - c) Galatia
 - d) Raetia
10. Pompey defeated Mithridates and receives submission of Armenia where?
 - a) Ephesus
 - b) Antioch
 - c) Nicopolis
 - d) Pergamum
11. Caesar chases down the remnants of Pompey's loyal troops at Munda which is closest to which of these:
 - a) Cadiz
 - b) Pharsalus
 - c) Alexandria
 - d) Thapsus
12. The pivotal sea battle near Actium is nearest to which of these:
 - a) Athens
 - b) Carthage
 - c) Hierosolyma
 - d) Zela

13. Which sea would you cross sailing between *Graecia* and *Sicilia*?
- | | |
|----------------|-----------------------|
| a) Aegeum | b) Ionian |
| c) Hadriaticum | d) Oceanus Hibernicus |
14. Which of these provinces was acquired by Rome last:
- | | |
|-------------|-------------|
| a) Hispania | b) Africa |
| c) Asia | d) Aegyptus |
15. The only emperor to build defensive walls around Rome was:
- | | |
|-------------|-------------|
| a) Augustus | b) Aurelian |
| c) Servius | d) Hadrian |

II. Identify on the maps.

Map A. Identify the following provinces

16. #82 is:
- | | |
|-------------------|-------------|
| a) Paphlagonia | b) Galatia |
| c) Libya Superior | d) Dalmatia |
17. #97 is:
- | | |
|---------------|------------|
| a) Palaestina | b) Cilicia |
| d) Arabia | d) Syria |
18. # 9 is:
- | | |
|-----------------------|---------------------|
| a) Belgica Viennensis | b) Germania Secunda |
| c) Raetia | d) Germania Prima |
19. #38 is:
- | | |
|------------|------------|
| a) Liguria | b) Raetia |
| c) Dacia | d) Rhodope |
20. #24 is:
- | | |
|-------------------------|-----------------|
| a) Mauritania Tingitana | b) Tripolitania |
| c) Armenia | d) Calabria |
21. Campania is #...
- | | |
|-------|-------|
| a) 20 | b) 44 |
| c) 41 | d) 46 |
22. Bithynia is #...
- | | |
|-------|-------|
| a) 80 | b) 63 |
| c) 61 | d) 62 |
23. Venetia & Histria is #...
- | | |
|-------|-------|
| a) 11 | b) 37 |
| c) 53 | d) 12 |
24. Phoenicia is #:
- | | |
|-------|--------|
| a) 26 | b) 95 |
| c) 15 | d) 101 |
25. Lusitania is #:
- | | |
|-------|-------|
| a) 45 | b) 6 |
| c) 21 | d) 12 |

Map B. Identify these Roman sites:

26. Campus Martius:
a) 2
b) 8
c) 5
d) 27
27. Which road would one take to Hispania?
a) 4
b) 9
c) 26
d) 23
28. What city is at the end of the road numbered 19?
a) Capua
b) Nomentum
c) Ostia
d) Aricia
29. The hill #3 is...
a) the Janiculum
b) Esquiline
c) Pincian
d) Vesuvius
30. Rome's most beloved temple devoted to Jupiter was located where?
a) 12
b) 10
c) 17
d) 18
31. many imperial palaces were located on #...
a) 3
b) 10
c) 16
d) 17
32. #9 is the Via...
a) Flaminia
b) Aurelia
c) Latina
d) Appia
33. The Etruscan king, Lars Porsenna marched on Rome from which direction?
a) 4
b) 25
c) 19
d) 27

Map C. Bay of Naples

34. Which of these was NOT buried by Mt. Vesuvius?
a) 8
b) 9
c) 12
d) 13
35. Which city was severely punished after it went over to Hannibal?
a) 2
b) 6
c) 15
d) 14
36. Home of the Cumaean Sibyl and first Greek colony on mainland Italy:
a) 3
b) 7
c) 8
d) 13
37. Home of Rome's navy:
a) 5
b) 6
c) 8
d) 12
38. The place where the emperor Tiberius "retired" for about ten years:
a) 19
b) 17
c) 16
d) 21

39. Considered to be one of the entrances to the Underworld:

- a) 3
- b) 4
- c) 5
- d) 11

40. One of Pompeii's rivals, Nuceria:

- a) 12
- b) 10
- c) 14
- d) 15

Map D. Pompeii

41. Stabiae Street:

- a) A-A
- b) B-B
- c) C-C
- d) 12

42. Caecilius' House:

- a) 11
- b) 12
- c) 13
- d) 14

43. Direction of the ancient harbor:

- a) 12
- b) 9
- c) 10
- d) 8

44. Pompeian forum

- a) 13
- b) 2
- c) 5
- d) 6

45. Whose temple is located at #1?

- a) Venus
- b) Apollo
- c) Isis
- d) Jupiter

Map E. The Greek Peninsula.

46. The wealthy city of Corinth was located where?

- a) 6
- b) 13
- c) 10
- d) 18

47. The region which gave its name to most of the provincial territory of Achaea:

- a) 6
- b) 7
- c) 8
- d) 17

48. Argos, capital city of Agamemnon:

- a) 10
- b) 11
- c) 12
- d) 18

49. Euboea:

- a) 4
- b) 18
- c) 19
- d) 23

50. Olympia, home of the Olympic games which always included wrestling was closest to:

- a) 8
- b) 10
- c) 12
- d) 9

51. Ithaca, island home of Odysseus:

- a) 1
- b) 2
- c) 3
- d) 4

Map F. Italia: select the closest number

52. Syracuse
a) 27
c) 24
b) 29
d) 25
-
53. Brundisium
a) 15
c) 10
b) 17
d) 16
54. Lilybaeum is closest to Carthage:
a) 25
c) 17
b) 24
d) 14
55. Bononia, site of several crucial battles:
a) 22
c) 14
b) 38
d) 3
56. Ravenna
a) 37
c) 20
b) 35
d) 36
57. Mt Aetna is nearest:
a) 31
c) 21
b) 30
d) 13
58. #4
a) Cremona
c) Florentia
b) Mediolanum
d) Padua
59. #13
a) Capreae
c) Sardinia
b) Corsica
d) Sicilia
60. #31
a) Tarentum
c) Beneventum
b) Rhegium
d) Messina

III. Map G. Identify the following monuments:

60. #1
a) Temple of Jupiter Capitolinus
c) Temple of Juno
b) Temple of Apollo
d) Temple of Vespasian
61. Forum of Trajan
a) 15
c) 8
b) 22
d) 18
63. #17
a) Basilica Aemilia
c) Basilica Iulia
b) Basilica of Constantine
d) Basilica of Maxentius
64. Baths of Titus
a) 3
c) 34
b) 33
d) 32

65. #30
a) Arch of Titus
c) Arch of Constantine
b) Arch of Septimius Severus
d) Arch of Augustus

66. Temple of Antoninus and Faustina
a) 16
c) 21
b) 15
d) 7

67. #19
a) Temple of the Divine Caesar
c) Regia
b) Temple of Vesta
d) Rostrum

68. Temple of Saturn
a) 5
c) 23
b) 9
d) 27

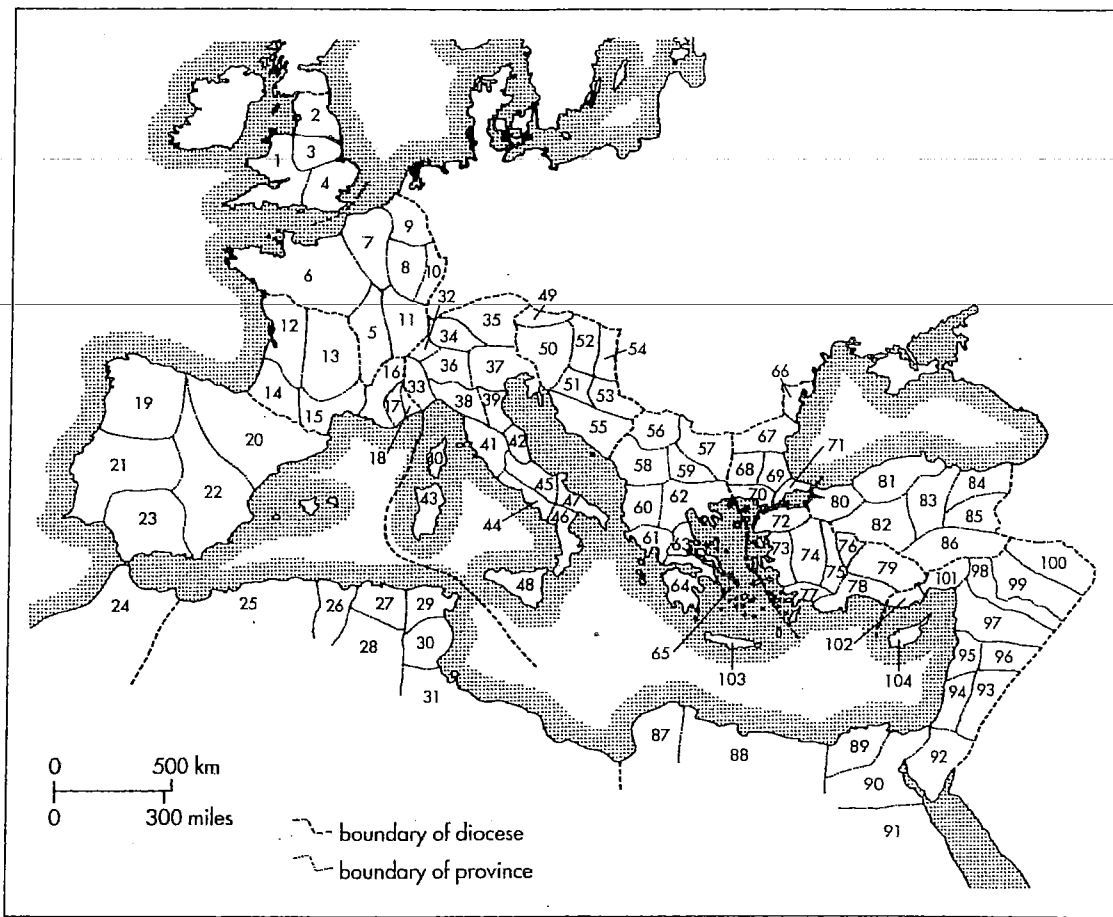
69. #14
a) Tullianum
c) Temple of Concord
b) Curia
d) Temple of Jupiter

70. Tabularium
a) 28
c) 4
b) 2
d) 12

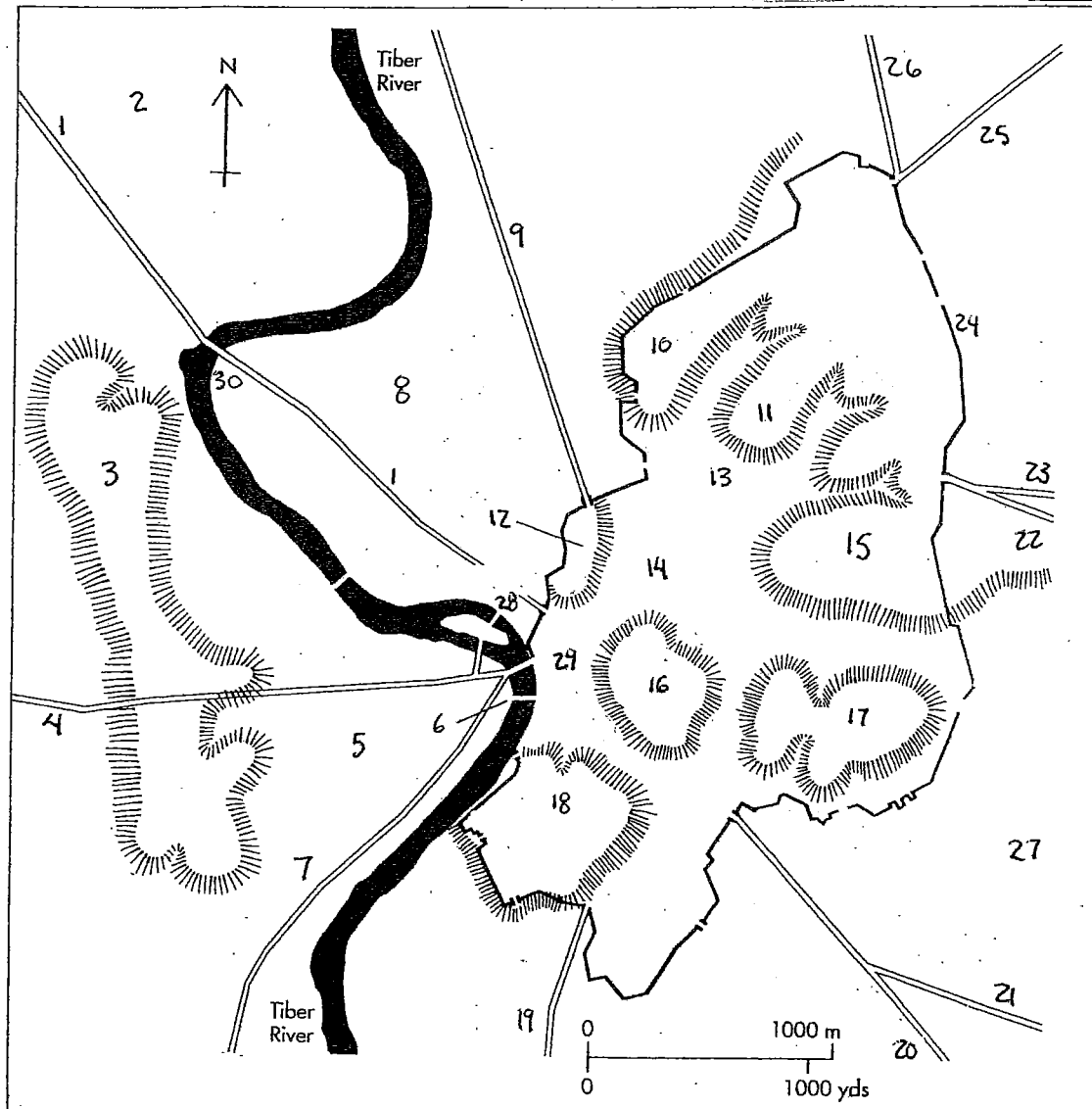
TIE-BREAKERS

96. The first marble temple in Rome was:
a) Jupiter Capitolinus
c) Saturn
b) Jupiter Stator
d) Janus
97. Which of these did NOT build a forum in Rome:
a) Trajan
c) Vespasian
b) Hadrian
d) Nerva
98. On Map A, Constantinople is located in which province?
a) 70
c) 60
b) 71
d) 78
99. Filling most of the valley between the Palatine and Aventine hills was:
a) Colisseum
c) Pantheon
b) Circus Maximus
d) Forum Romanum
100. On Map C, Puteoli, which served as Rome's harbor for much of its history was:
a) 3
c) 7
b) 6
d) 13


Map A



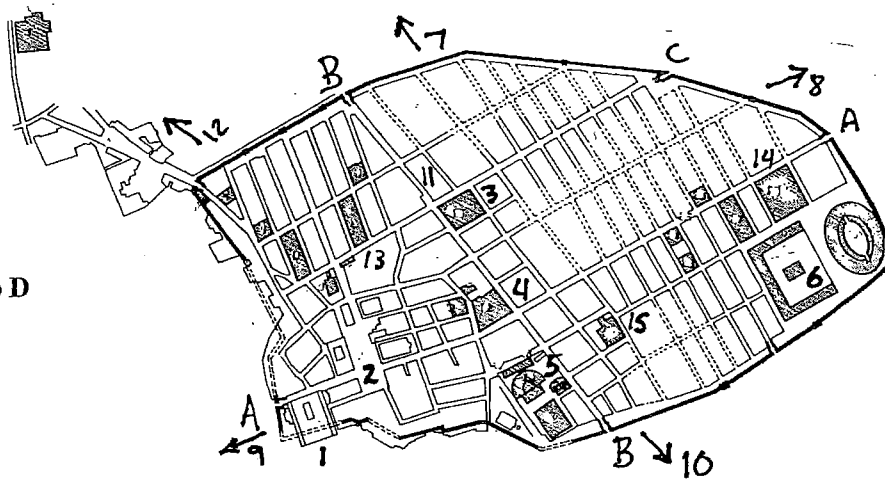
Map B



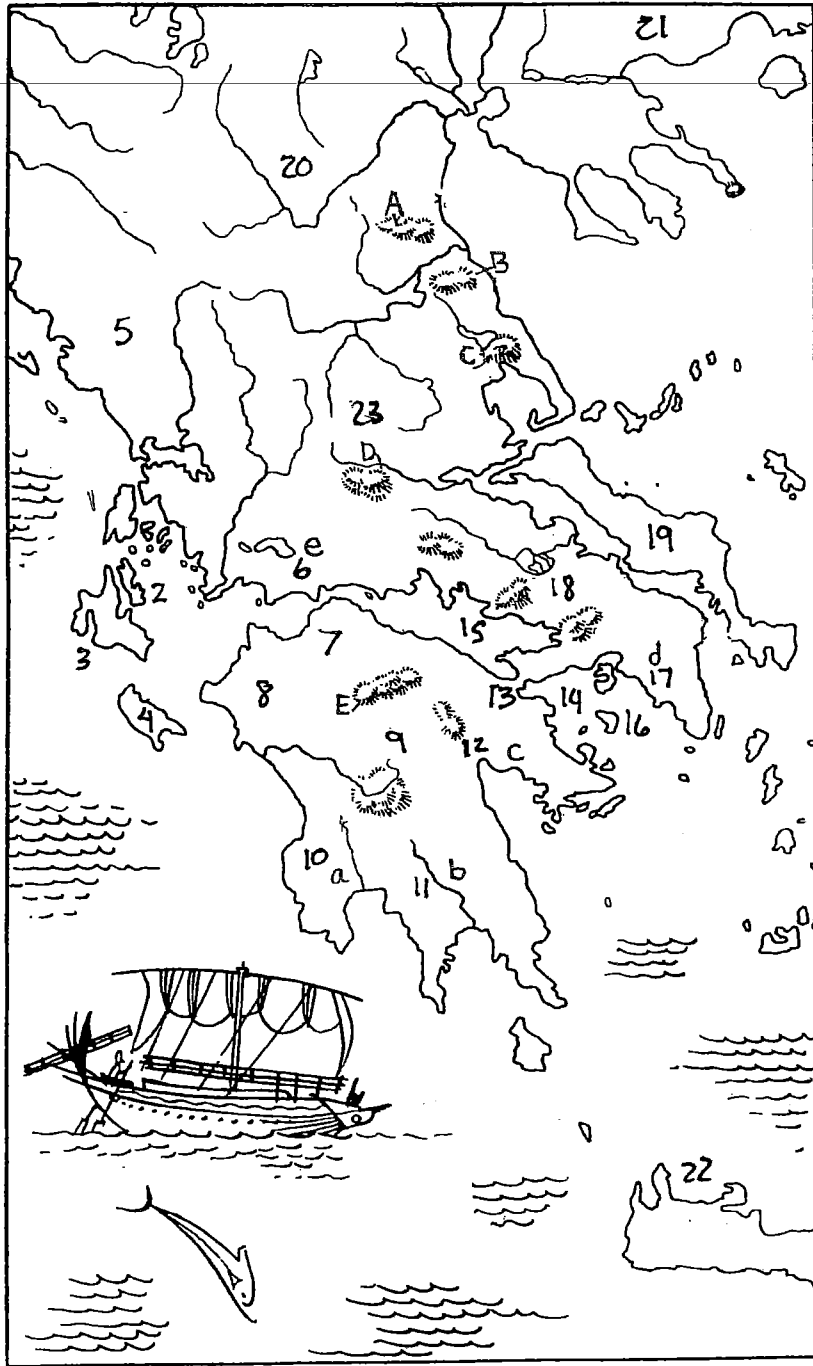
Map C



Map D



Map E



Map F



Map G

